

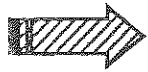
HANDS-ON EQUATIONS[®]

Lesson #2

Name: _____

Classwork Sheet

Grade: _____



Use your Hands-On Equations Kit to solve:

New Work

1. $2x = x + 3$ $x =$ Check: _____

2. $3x = x + 4$ $x =$ Check: _____

3. $x + 4 = 2x + 3$ $x =$ Check: _____

4. $4x = 2x + 6$ $x =$ Check: _____

Previous Work

Solve from the picture:

5.  $x =$ Check: _____

6.  $x =$ Check: _____

7.  $x =$ Check: _____

8.  $x =$ Check: _____

9.  $x =$ Check: _____

10.  $x =$ Check: _____

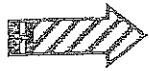
HANDS-ON EQUATIONS[®]

Lesson #2

Name: _____

Extra Practice

Grade: _____



Use your Hands-On Equations Kit to solve:

New Work

1. $2x = x + 7$ $x =$ Check: _____

2. $3x = x + 10$ $x =$ Check: _____

3. $x + 7 = 2x + 3$ $x =$ Check: _____


4. $4x = 2x + 18$ $x =$ Check: _____

Previous Work

5.  $x =$ Check: _____

6.  $x =$ Check: _____

7.  $x =$ Check: _____

8.  $x =$ Check: _____

9.  $x =$ Check: _____

10.  $x =$ Check: _____