

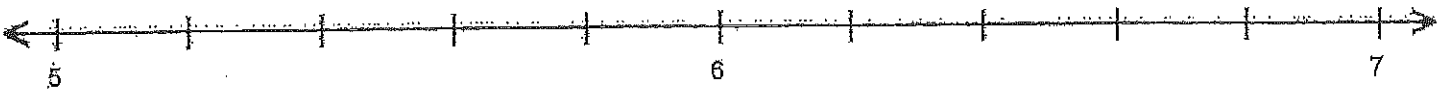
Name : _____

Score : _____


Teacher : _____

Date : _____

Decimal Numbers on Number Lines



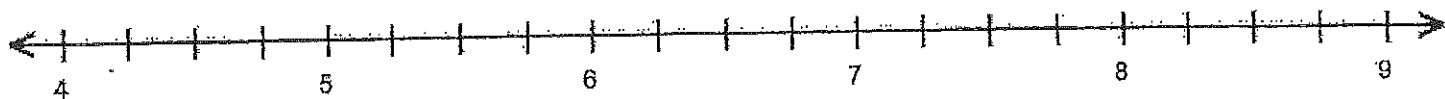
A = 5.2 B = 6.6 C = 6.4 D = 5.8



A = 7.2 B = 6.7 C = 7.6 D = 7.3



A = 6.5 B = 3.5 C = 5.5 D = 4.5



A = 6.75 B = 4.5 C = 7.25 D = 5.25



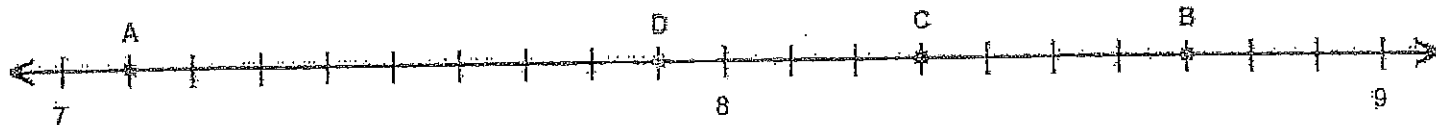
Name : _____

Score : _____

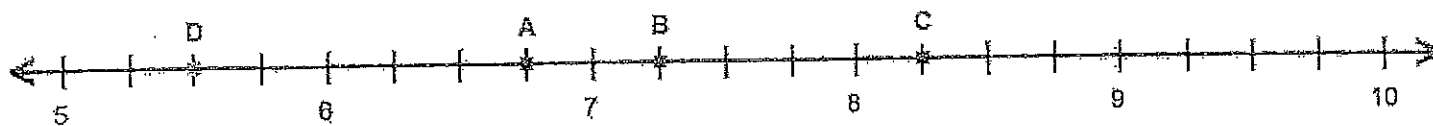
Teacher : _____

Date : _____

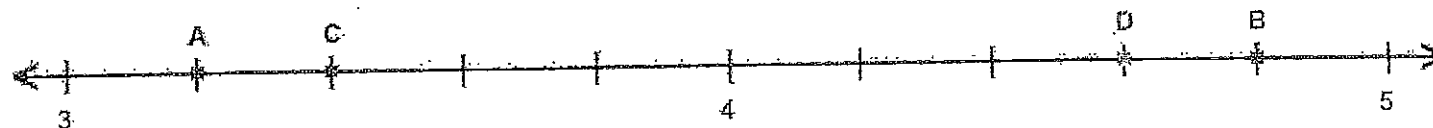
Decimal Numbers on Number Lines



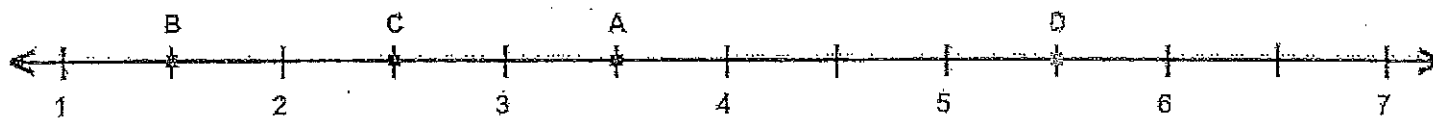
A = _____ B = _____ C = _____ D = _____



A = _____ B = _____ C = _____ D = _____



A = _____ B = _____ C = _____ D = _____



A = _____ B = _____ C = _____ D = _____

